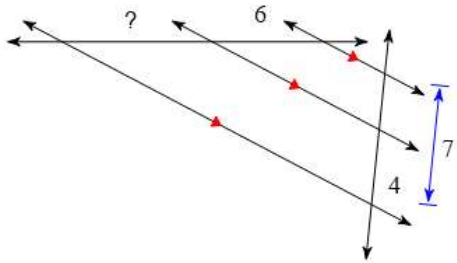


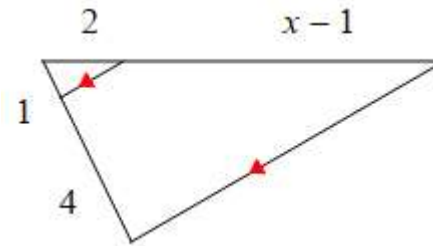
GEOMETRY WARM-UP

1. _____
2. _____
3. _____
4. _____
5. _____
6. _____

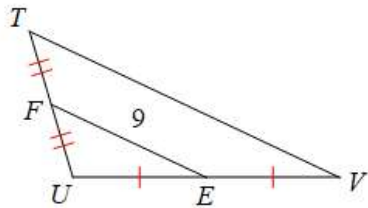
1. Solve for the missing part.



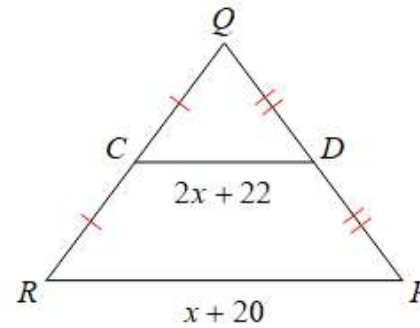
2. Solve for x.



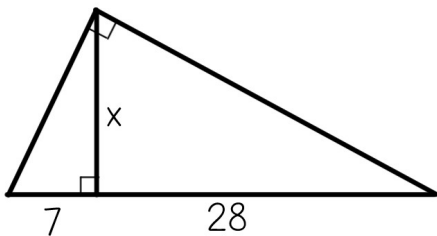
3. Find VT.



4. Solve for x.



5. Solve for x.



6. Solve for the missing side.

