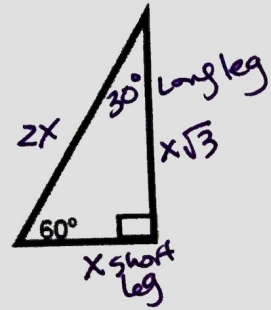
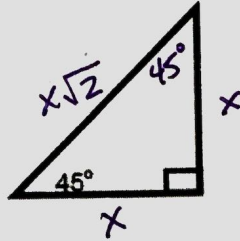
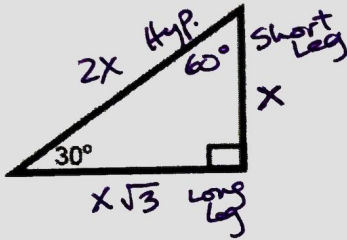


Fill in the remaining lengths:



Using the above information, find the remaining lengths:

$$2x = 1$$

$$x = \frac{1}{2}$$

