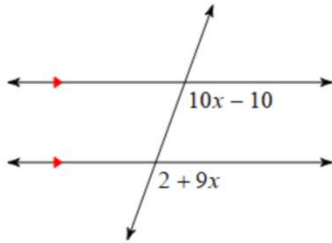
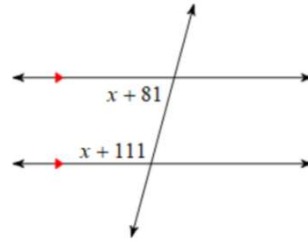


Transversals

1. Name the angle pair. Solve for x.

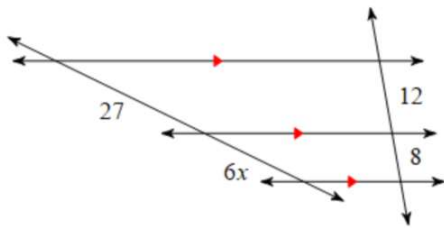


2. Name the angle pair. Solve for x.



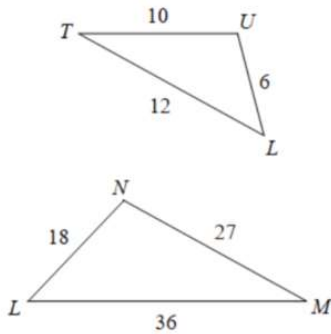
Proportional Parts

3. Solve for x.

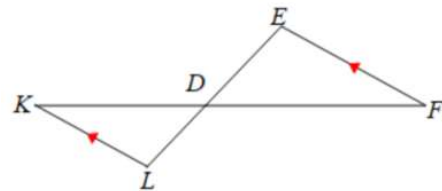


Triangle Similarity: SSS~, SAS~, AA~

4. Are the triangles similar?



5. Are the triangles similar?



Midsegments

6. Solve for x.

