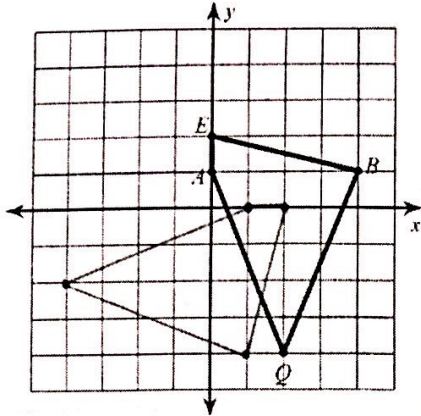


Partner 1 Answer Key

a

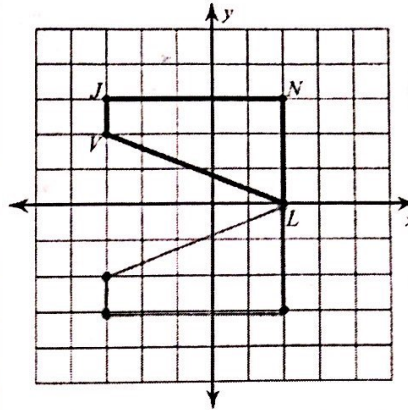
Rotate the image 90° clockwise about the origin.



Coordinates for the matching points
(1 , -4)

b

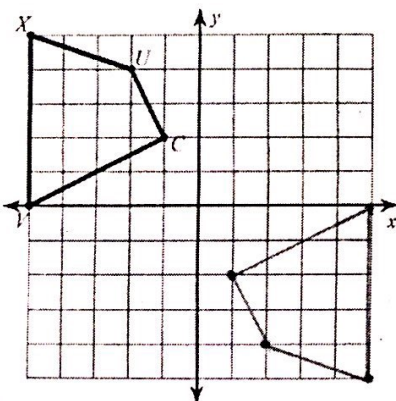
Reflect the image across the x-axis.



Coordinates for the matching points
(2 , 0)
(2 , -3)

c

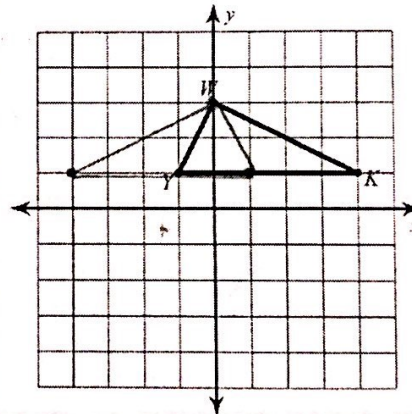
Rotate the image 180° about the origin.



Coordinates for the matching points
(5 , 0)

d

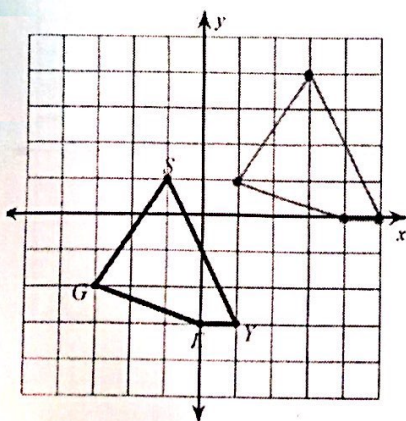
Reflect the image across the y-axis.



Coordinates for the matching points
(0 , 3)

e

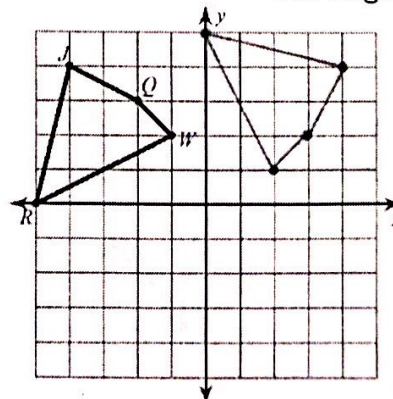
Translate the image four units right and three units up.



Coordinates for the matching points
(3 , 4)

f

Rotate the image 90° clockwise about the origin.



Coordinates for the matching points
(2 , 1)

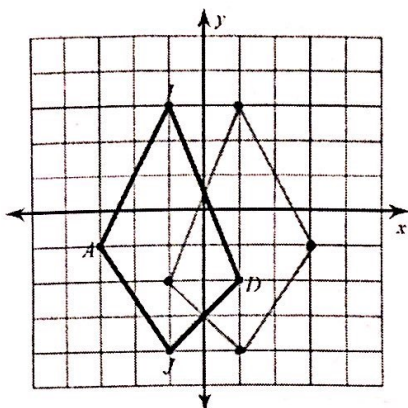
©Lindsay Burris, "Eye Learn Math", 2015

Partner 2

Answer Key

a

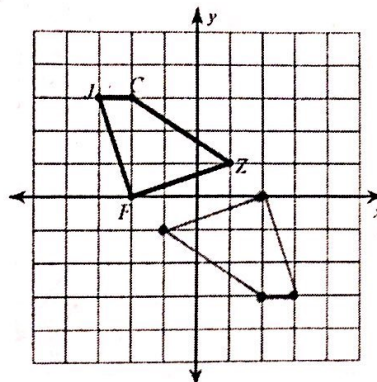
Reflect the image across the y-axis.



Coordinates
for the
matching
points
(1 , -4)

b

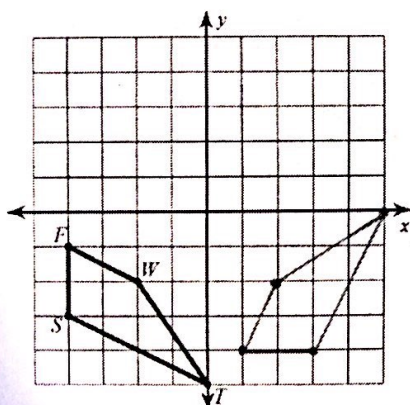
Rotate the image 180° about the origin.



Coordinates
for the
matching
points
(2 , 0)
(2 , -3)

c

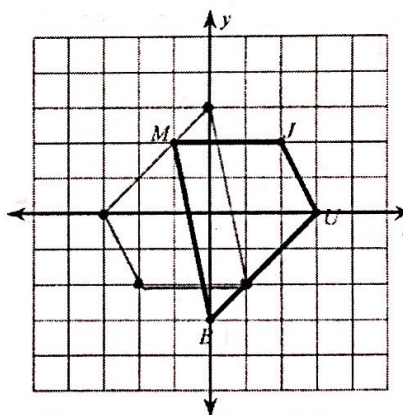
Rotate the image 90° counterclockwise about the origin.



Coordinates
for the
matching
points
(5 , 0)

d

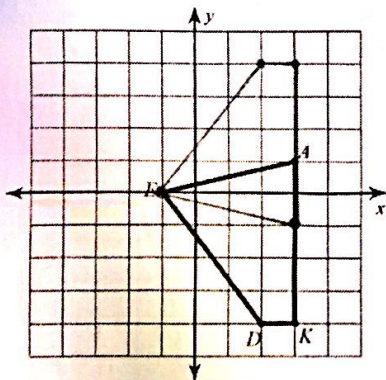
Rotate the image 180° about the origin.



Coordinates
for the
matching
points
(0 , 3)

e

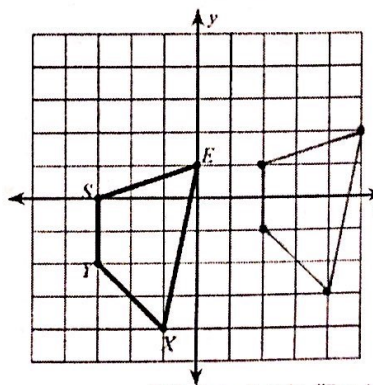
Reflect the image across the x-axis.



Coordinates
for the
matching
points
(3 , 4)

f

Translate the image five units right and one unit up.



Coordinates
for the
matching
points
(2 , 1)

©Lindsay Burris, "Eye Learn Math", 2015