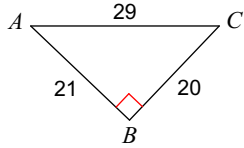


Homework - Part 2

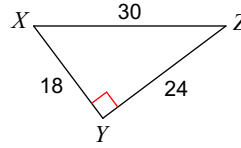
Find the value of each trigonometric ratio.

1) $\tan A$



$\frac{20}{21}$

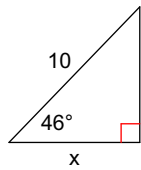
2) $\sin X$



$\frac{4}{5}$

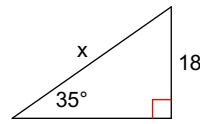
Find the missing side. Round to the nearest tenth.

3)



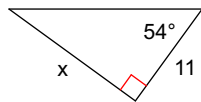
6.9

4)



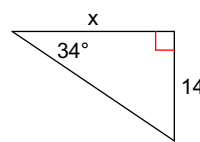
31.4

5)



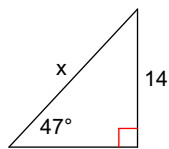
15.1

6)



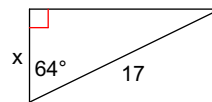
20.8

7)



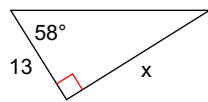
19.1

8)



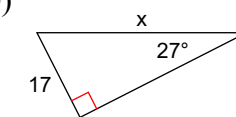
7.5

9)



20.8

10)



37.4