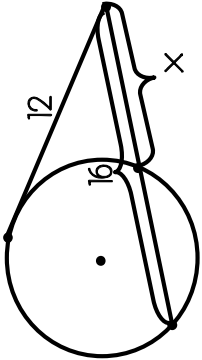

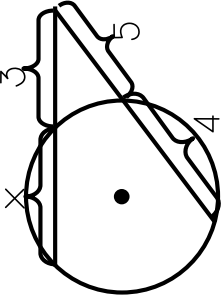
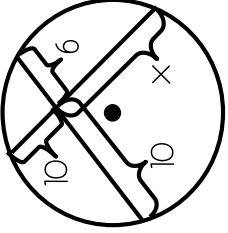

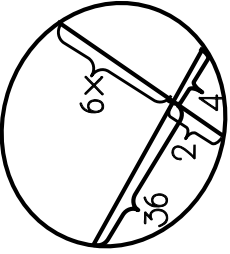
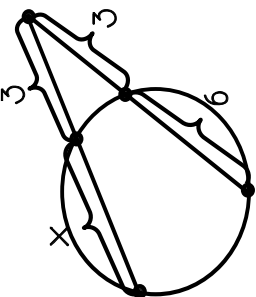
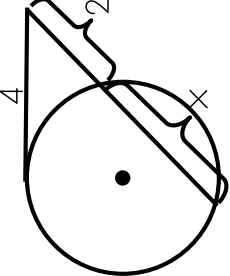

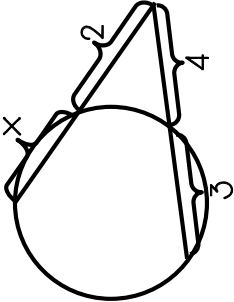
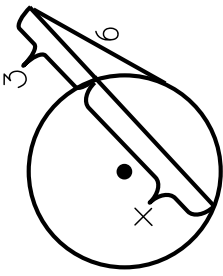
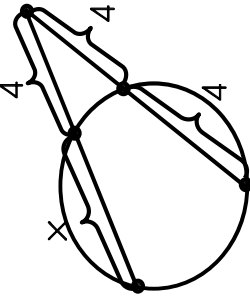
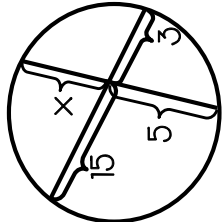
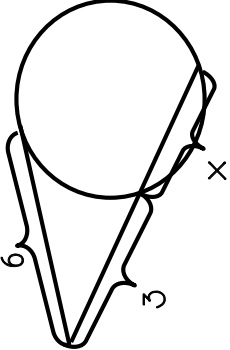
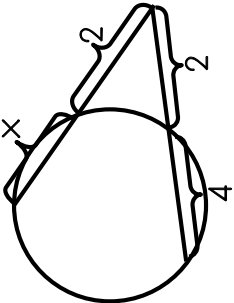


Review Activity 1

<p><b>a</b> Find the value of 'x'.</p> 	<p><b>b</b> Find the value of 'x'.</p> 	<p><b>c</b> Find the value of 'x'.</p> 	<p><b>d</b> Find the value of 'x'.</p> 
<p><b>e</b> Find the value of 'x'.</p> 	<p><b>f</b> Find the value of 'x'.</p> 	<p><b>j</b> Find the value of 'x'.</p> 	<p><b>h</b> Find the value of 'x'.</p> 
<p><b>i</b> Find the value of 'x'.</p> 	<p><b>j</b> Find the value of 'x'.</p> 	<p><b>k</b> Find the value of 'x'.</p> 	<p><b>L</b> Find the value of 'x'.</p> 
<p><b>M</b> Find the value of 'x'.</p> 	<p><b>N</b> Find the value of 'x'.</p> 	<p><b>O</b> Find the value of 'x'.</p> 	<p><b>P</b> Find the value of 'x'.</p> 