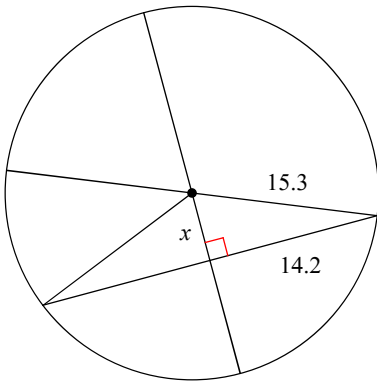


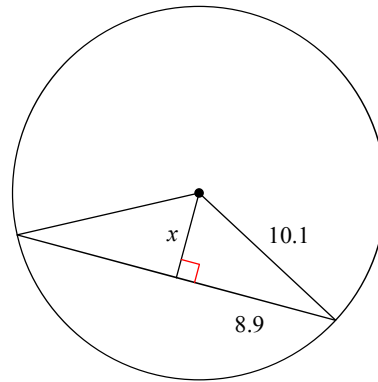
Quiz Review - Segments in Circles

Find the length of the segment indicated. Round your answer to the nearest tenth if necessary.

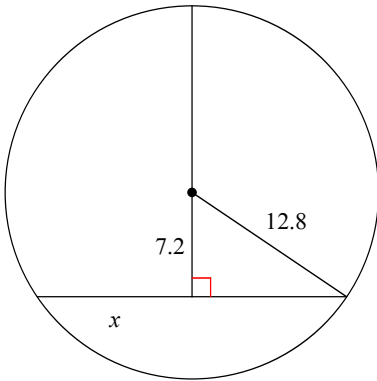
1)



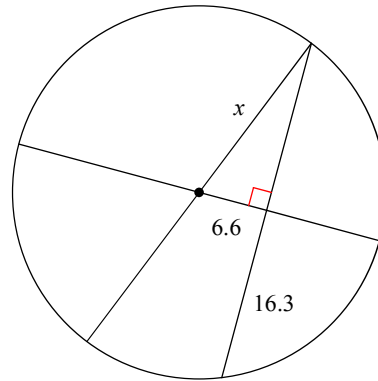
2)



3)

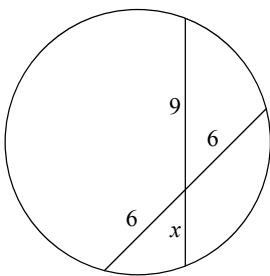


4)

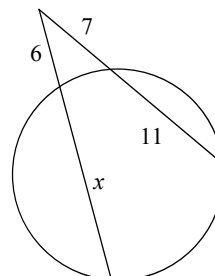


Solve for x . Assume that lines which appear tangent are tangent.

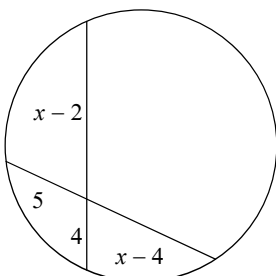
5)



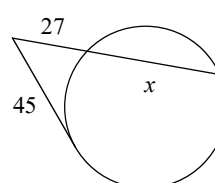
6)



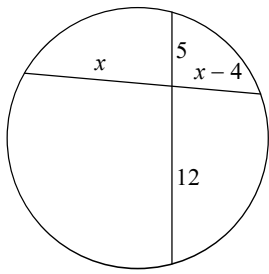
7)



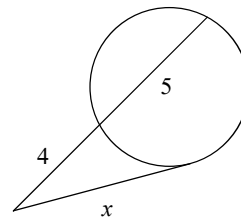
8)



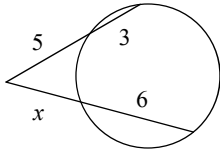
9)



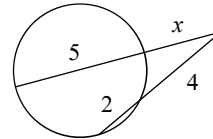
10)



11)

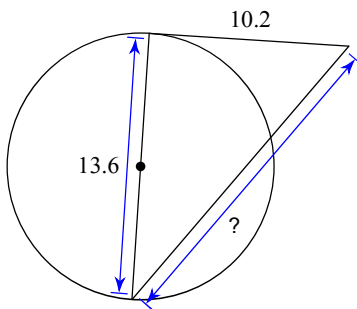


12)

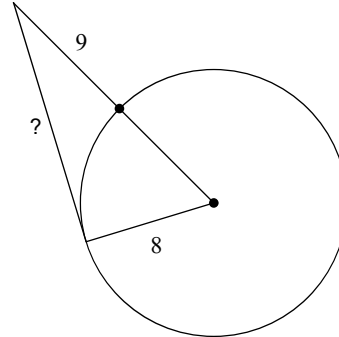


Find the segment length indicated. Assume that lines which appear to be tangent are tangent.

13)

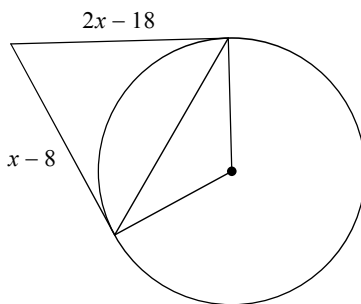


14)

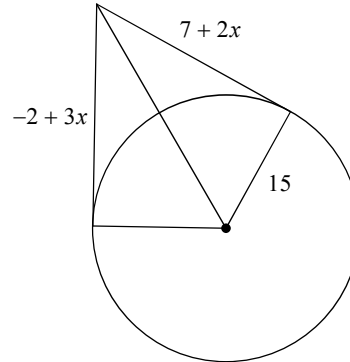


Solve for x. Assume that lines which appear to be tangent are tangent.

15)

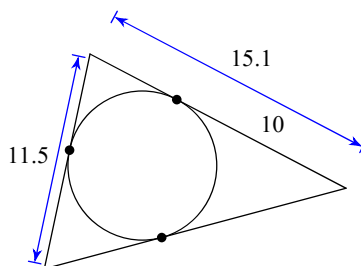


16)

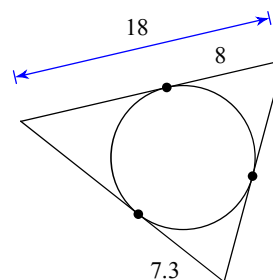


Find the perimeter of each polygon. Assume that lines which appear to be tangent are tangent.

17)



18)



Answers to Quiz Review - Segments in Circles

1) 5.7

5) 4

9) 10

13) 17

17) 43

2) 4.8

6) 15

10) 6

14) 15

18) 50.6

3) 10.6

7) 12

11) 4

15) 10

4) 17.6

8) 48

12) 3

16) 9