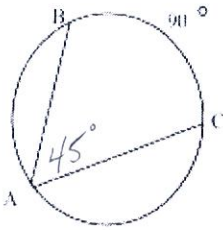


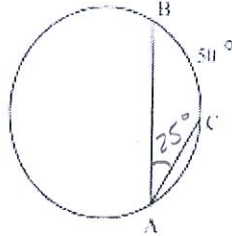
Geometry
Classwork/Homework – Inscribed Angles

Name: Kay
Date: _____

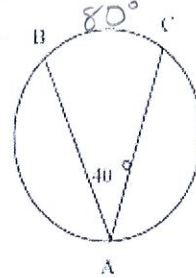
1. Find $m\angle A$.



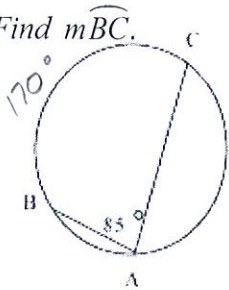
2. Find $m\angle A$.



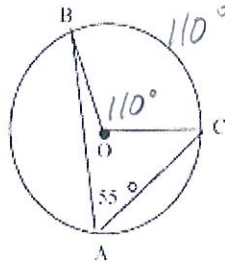
3. Find $m\widehat{BC}$.



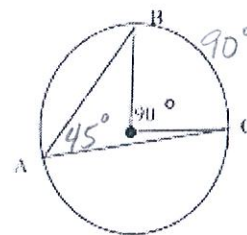
4. Find $m\widehat{BC}$.



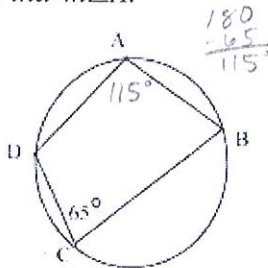
5. Find $m\angle BOC$.



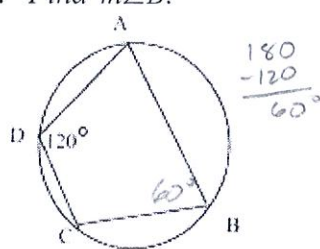
6. Find $m\angle A$.



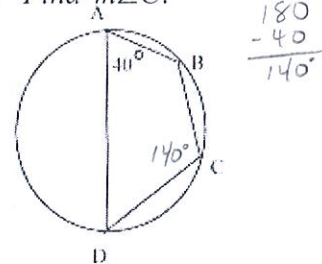
7. Find $m\angle A$.



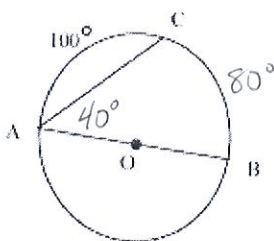
8. Find $m\angle B$.



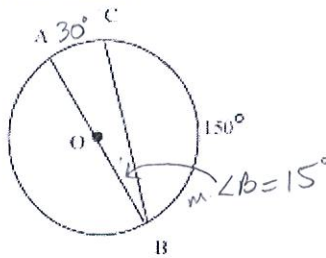
9. Find $m\angle C$.



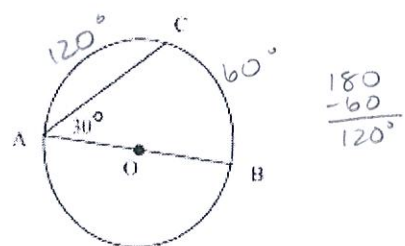
10. Find $m\angle A$.



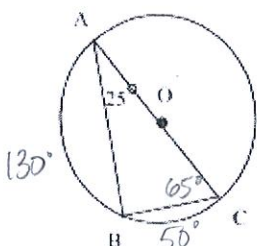
11. Find $m\angle B$.



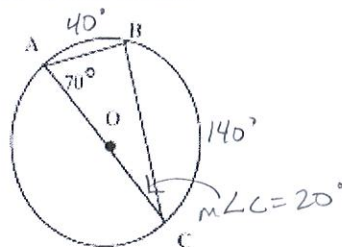
12. Find $m\widehat{AC}$.



13. Find $m\angle C$.



14. Find $m\angle C$.



15. Find $m\angle C$.

