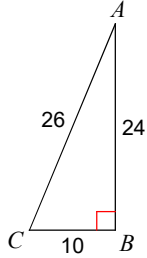


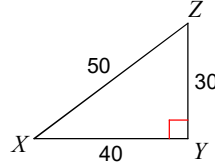
Assignment

Find the value of each trigonometric ratio.

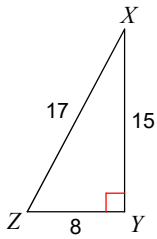
1) $\cos C$



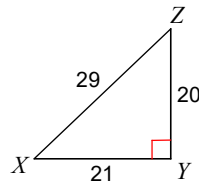
2) $\sin X$



3) $\cos Z$

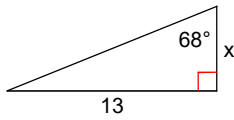


4) $\cos X$

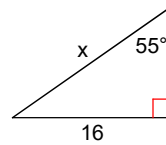


Find the missing side. Round to the nearest tenth.

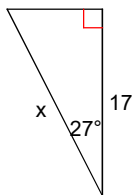
5)



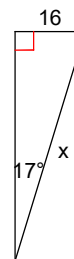
6)



7)



8)



Answers to Assignment (ID: 1)

1) $\frac{5}{13}$
5) 5.3

2) $\frac{3}{5}$
6) 19.5

3) $\frac{8}{17}$
7) 19.1

4) $\frac{21}{29}$
8) 54.7